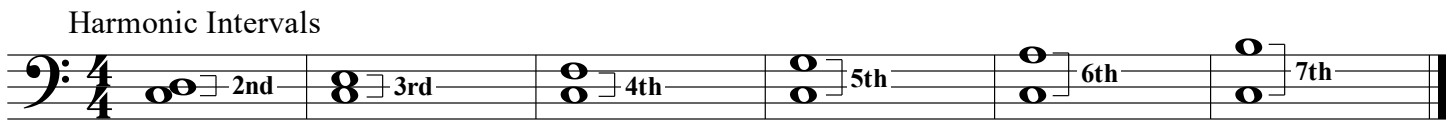



Intervals I


In music, an **interval** is the distance between two notes.

A **melodic interval** is the distance between two notes which are played one at a time.

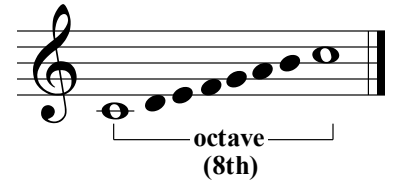
A **harmonic interval** is the distance between two notes which are played at the same time.




The interval between two identical notes is called a **unison**.



The interval of an eighth is called an **octave**.




1. Identify the following intervals as melodic (M) or harmonic (H).



2. Name these melodic intervals.



3. Name these harmonic intervals.



4. Write the indicated harmonic interval above the given note.



5. Write the indicated harmonic interval above the given note.

